

Muwest School

Summer Home Assignment Class: 5th

Subject: English

→ Write an essay on "myself" about 20 points & make your child able to do presentation of same

→ Find Opposite of following words

- a) Mount b) Blessed c) Awake
d) Remember e) Difficult f) Alive

Subject: Science

→ Why Can you not taste food properly when you have a cold?

Subject: Urdu

بابا غلام شاہ بادشاہ کے بارے میں 10 سے 15 لکھیے؟

Subject: Art & Craft

Write your name in Urdu Calligraphy on Drawing

Signature
J.P. 2022

Subject: Morab Science

کلمہ اول و دوم ترجمہ کے ساتھ یاد کریں
حروف جار کی وضاحت

Subject: Kashmiri

کمپیوٹرس متعلق لیکچر ڈہ جملہ

Dr. J. P. Singh
J.P.Singh

Q. Find the highest common factor (HCF) by prime factorisation. One has been done for you:-

(a) 44, 28

$$44 = 2 \times 2 \times 11$$

$$28 = 2 \times 2 \times 7$$

$$\text{HCF} = 2 \times 2 = 4$$

(b) 45, 75

$$45 = \underline{\hspace{2cm}}$$

$$75 = \underline{\hspace{2cm}}$$

$$\text{HCF} = \underline{\hspace{2cm}}$$

(c) 22, 44

$$22 = \underline{\hspace{2cm}}$$

$$44 = \underline{\hspace{2cm}}$$

$$\text{HCF} = \underline{\hspace{2cm}}$$

(d) 75, 25

$$75 = \underline{\hspace{2cm}}$$

$$25 = \underline{\hspace{2cm}}$$

$$\text{HCF} = \underline{\hspace{2cm}}$$

(e) 63, 36

$$63 = \underline{\hspace{2cm}}$$

$$36 = \underline{\hspace{2cm}}$$

$$\text{HCF} = \underline{\hspace{2cm}}$$

(f) 86, 64

$$86 = \underline{\hspace{2cm}}$$

$$64 = \underline{\hspace{2cm}}$$

$$\text{HCF} = \underline{\hspace{2cm}}$$

(g) 36, 18

$$36 = \underline{\hspace{2cm}}$$

$$18 = \underline{\hspace{2cm}}$$

$$\text{HCF} = \underline{\hspace{2cm}}$$

(h) 48, 30

$$48 = \underline{\hspace{2cm}}$$

$$30 = \underline{\hspace{2cm}}$$

$$\text{HCF} = \underline{\hspace{2cm}}$$

(i) 150, 225

$$150 = \underline{\hspace{2cm}}$$

$$225 = \underline{\hspace{2cm}}$$

$$\text{HCF} = \underline{\hspace{2cm}}$$

(j) 24, 180

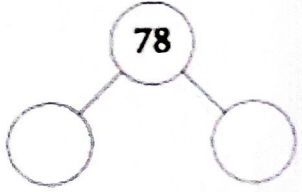
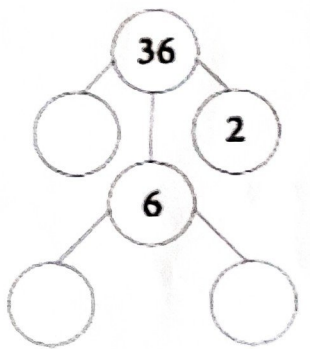
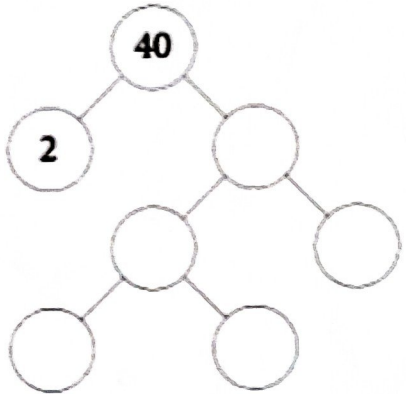
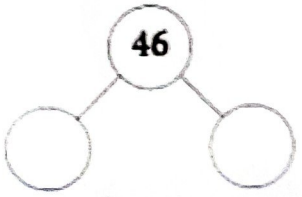
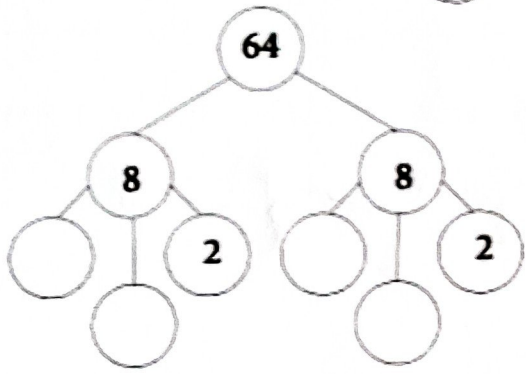
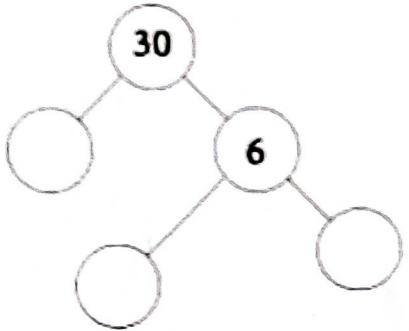
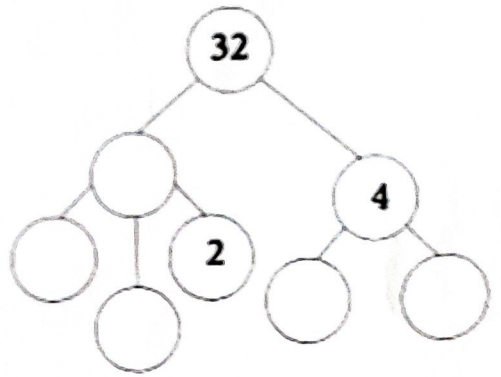
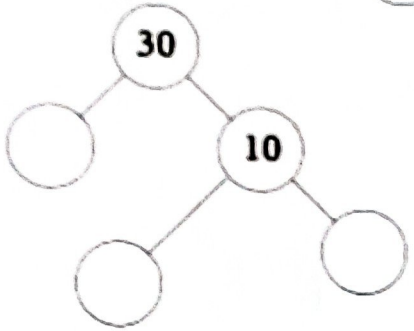
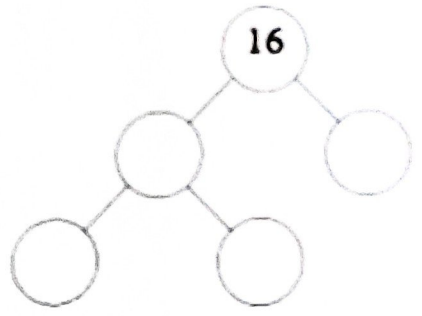
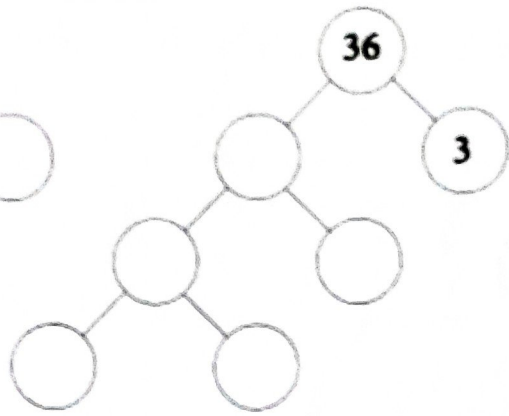
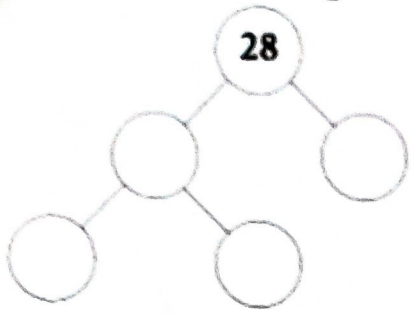
$$24 = \underline{\hspace{2cm}}$$

$$180 = \underline{\hspace{2cm}}$$

$$\text{HCF} = \underline{\hspace{2cm}}$$

Sahar
V.P. Egn

Q. Fill the following factor trees:-



Salman
5.9.20